

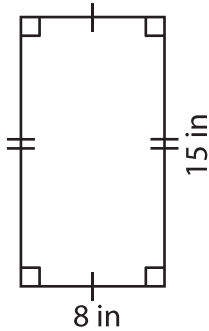
Name : \_\_\_\_\_

## Area – Quadrilateral

L2S3

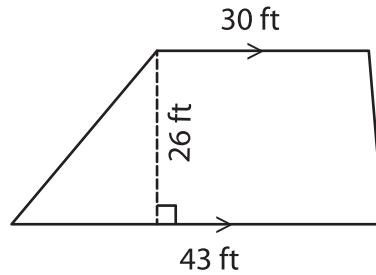
Find the area of each quadrilateral.

1)



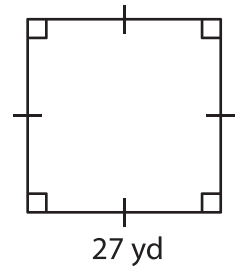
Area = \_\_\_\_\_

2)

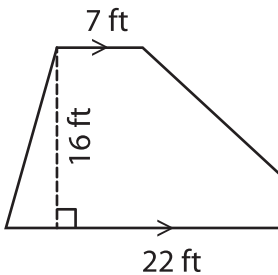


Area = \_\_\_\_\_

3)



4)



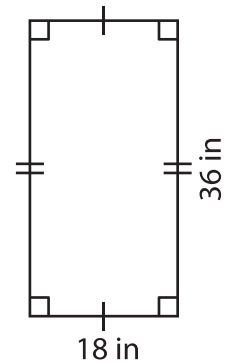
Area = \_\_\_\_\_

Gain complete access to the largest collection of worksheets in all subjects!

Members, please log in to download this worksheet.

Not a member? Please sign up to gain complete access.

[www.mathworksheets4kids.com](http://www.mathworksheets4kids.com)



Area = \_\_\_\_\_

7) Determine the area of a parallelogram with a base of 13 feet and a height of 13 feet respectively.

Area = \_\_\_\_\_

8) If the side of a square measures 42 inches, find the area of the square.