

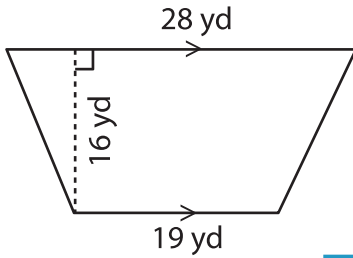
Name : _____

Area – Quadrilateral

L2S5

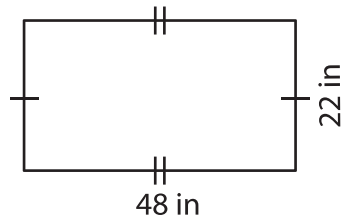
Find the area of each quadrilateral.

1)



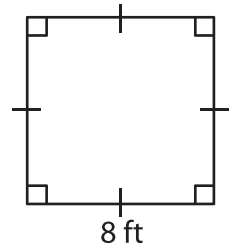
Area = _____

2)

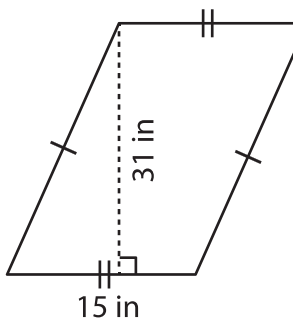


Area = _____

3)



4)



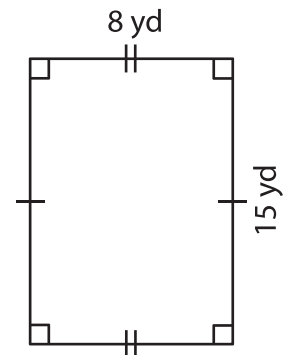
Area = _____

Gain complete access to the largest collection of worksheets in all subjects!

Members, please log in to download this worksheet.

Not a member? Please sign up to gain complete access.

www.mathworksheets4kids.com



Area = _____

7) Determine the area of a parallelogram whose base and height are 25 feet and 8 feet respectively.

8) What is the area of the rectangle whose length is 54 inches and width is 31 inches?
