

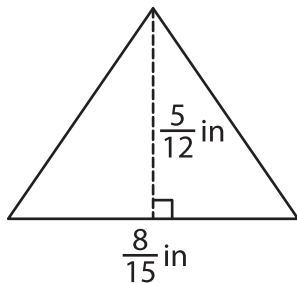
Name : _____

T2S1

Area of a Triangle

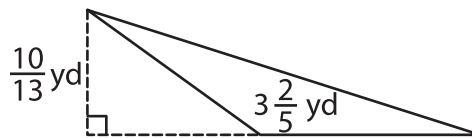
A) Find the area of each triangle.

1)

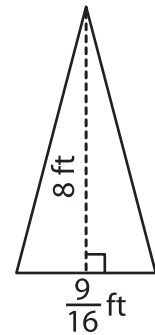


Area = _____

2)



3)



Area = _____

B) Find the area of each triangle.

4) base = $7\frac{1}{9}$ yd, height = _____ in

Area = _____

6) base = $\frac{4}{7}$ ft, height = $\frac{7}{1}$ _____

Area = _____

8) Find the area of the triangle. _____ es.

PREVIEW

Gain complete access to the largest collection of worksheets in all subjects!

Members, please log in to download this worksheet.

Not a member? Please sign up to gain complete access.

www.mathworksheets4kids.com

9) The base and height of a triangle are $\frac{19}{20}$ foot and $2\frac{6}{17}$ feet respectively. Determine the area of the triangle.
