

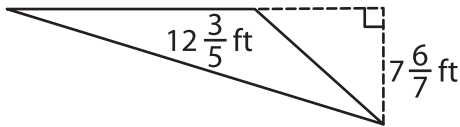
Name : \_\_\_\_\_

T2S2

## Area of a Triangle

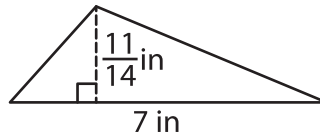
A) Find the area of each triangle.

1)



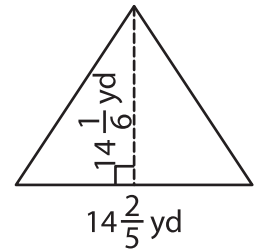
Area = \_\_\_\_\_

2)



Area = \_\_\_\_\_

3)



B) Find the area of each triangle.

4) base =  $13\frac{1}{2}$  in, height = \_\_\_\_\_ ft

Area = \_\_\_\_\_

6) base =  $5\frac{1}{8}$  yd, height = \_\_\_\_\_ in

Area = \_\_\_\_\_

8) The height of a triangle whose base is  $\frac{5}{12}$  yard?

\_\_\_\_\_

9) Find the area of the triangle whose base is  $\frac{18}{19}$  inch and height is  $\frac{4}{9}$  inch.

\_\_\_\_\_

**PREVIEW**

Gain complete access to the largest collection of worksheets in all subjects!

Members, please log in to download this worksheet.

Not a member? Please sign up to gain complete access.

[www.mathworksheets4kids.com](http://www.mathworksheets4kids.com)