

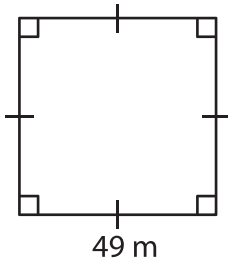
Name : _____

Area – Quadrilateral

L2S1

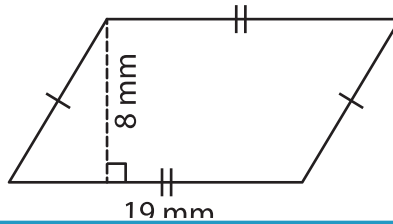
Find the area of each quadrilateral.

1)



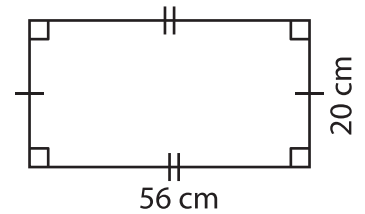
Area = _____

2)

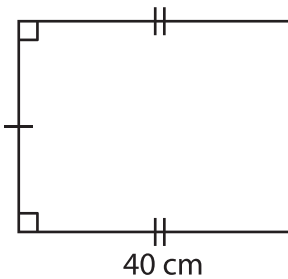


Area = _____

3)



4)



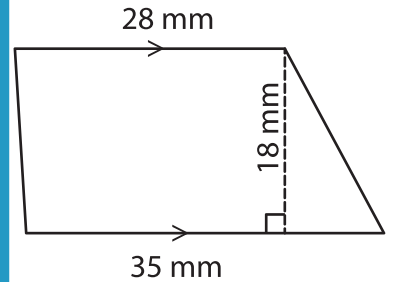
Area = _____

Gain complete access to the largest collection of worksheets in all subjects!

Members, please log in to download this worksheet.

Not a member? Please sign up to gain complete access.

www.mathworksheets4kids.com



Area = _____

7) The sum of the lengths of the two parallel sides is 100 mm. Determine the area of the trapezoid.

The height is 10 mm and 6 mm respectively.

8) A parallelogram has a height of 3 cm and a base of 4 cm. What is the area of the parallelogram?
