

Name : _____

T2S1

Area of a Rectangle

A) Find the area of each rectangle for the given measurements.

1) length = 0.13 m, width = 9 cm

Area = _____ cm^2

2) width = 1800 cm, length = 23 m

Area = _____ m^2

3) width = 5 mm, length = 0.9 cm

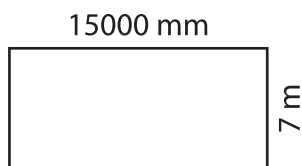
Area = _____ mm^2

4) length = 410 mm, width = 24 cm

Area = _____ cm^2

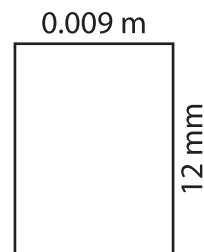
B) Find the area of each rectangle.

5)



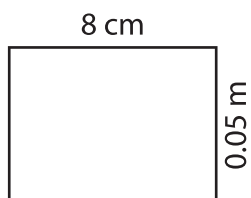
Area = _____ m^2

6)



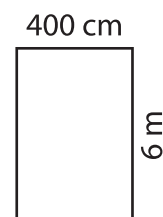
Area = _____ mm^2

7)



Area = _____ cm^2

8)



Area = _____ m^2

9) The length and width of a rectangle are 0.026 m and 18 mm respectively. Determine the area of the rectangle.

_____ mm^2