

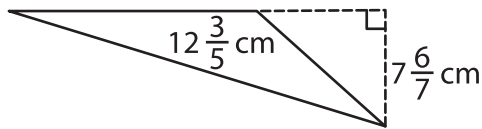
Name : \_\_\_\_\_

T2S2

## Area of a Triangle

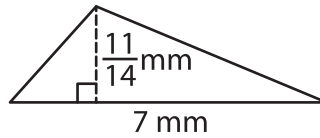
A) Find the area of each triangle.

1)



Area = \_\_\_\_\_

2)



B) Find the area of each triangle.

4) base =  $13\frac{1}{2}$  mm, height =  $\frac{9}{7}$  cm

Area = \_\_\_\_\_

6) base =  $5\frac{1}{8}$  m, height =  $\frac{1}{4}$  mm

Area = \_\_\_\_\_

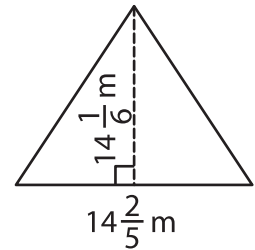
8) The height of a triangle is  $\frac{5}{12}$  m?

\_\_\_\_\_

9) Find the area of the triangle whose base is  $\frac{18}{19}$  mm and height is  $\frac{4}{9}$  mm.

\_\_\_\_\_

3)



Area = \_\_\_\_\_

**PREVIEW**

Gain complete access to the largest collection of worksheets in all subjects!

Members, please log in to download this worksheet.

Not a member? Please sign up to gain complete access.

[www.mathworksheets4kids.com](http://www.mathworksheets4kids.com)