

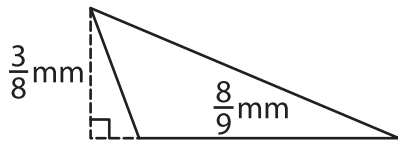
Name : _____

T2S4

Area of a Triangle

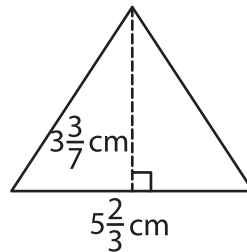
A) Find the area of each triangle.

1)



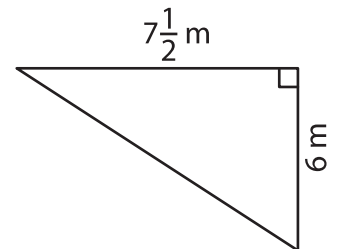
Area = _____

2)



Area = _____

3)



B) Find the area of each triangle.

4) base = $\frac{6}{7}$ m, height = $\frac{1}{7}$ m

Area = _____

Area = _____

6) base = $4\frac{4}{5}$ mm, height = $\frac{1}{5}$ mm

Area = _____

Area = _____

8) The base of a triangle is $5\frac{1}{2}$ cm and its height is $\frac{7}{12}$ cm?

Area = _____

PREVIEW

Gain complete access to the largest collection of worksheets in all subjects!

Members, please log in to download this worksheet.

Not a member? Please sign up to gain complete access.

www.mathworksheets4kids.com

9) Find the area of the triangle whose base is $6\frac{3}{5}$ mm and height is $4\frac{1}{6}$ mm.

Area = _____