

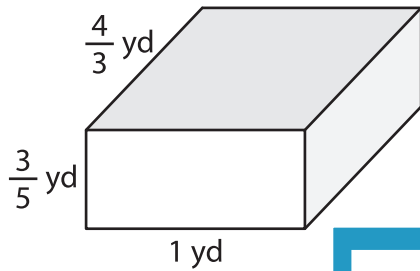
Name : \_\_\_\_\_

## Volume - Rectangular Prism

Fractions: S2

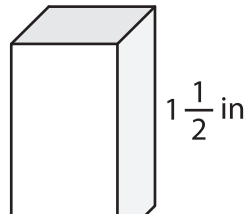
A) Find the volume of each rectangular prism.

1)



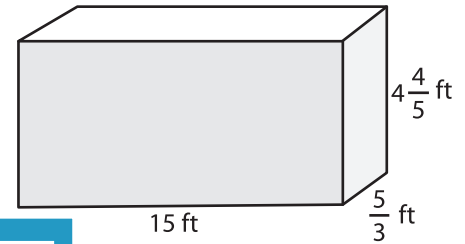
Volume = \_\_\_\_\_

2)



Volume = \_\_\_\_\_

3)



Volume = \_\_\_\_\_

B) Find the volume of each

4) height =  $\frac{1}{2}$  ft ; length = \_\_\_\_\_

Volume = \_\_\_\_\_

6) length =  $\frac{4}{7}$  yd ; width = \_\_\_\_\_

Volume = \_\_\_\_\_

Gain complete access to the largest collection of worksheets in all subjects!

Members, please log in to download this worksheet.

Not a member? Please sign up to gain complete access.

[www.mathworksheets4kids.com](http://www.mathworksheets4kids.com)

height =  $1\frac{1}{5}$  in ; length =  $\frac{3}{8}$  in

height = 3 ft ; width =  $\frac{8}{9}$  ft

Volume = \_\_\_\_\_

8) A rectangular prism has a length of  $2\frac{2}{3}$  yards, a width of  $\frac{1}{4}$  yard, and a height of 2 yards. Determine the volume of the prism.

\_\_\_\_\_