

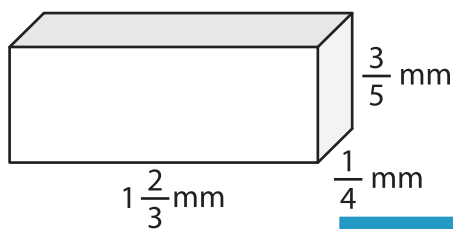
Name : _____

Volume - Rectangular Prism

Fractions: S1

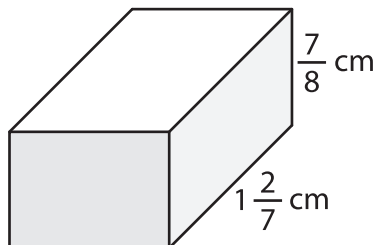
A) Find the volume of each rectangular prism.

1)

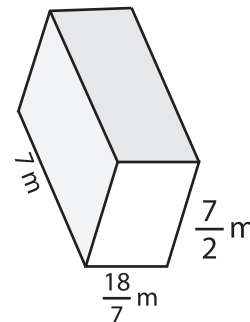


Volume = _____

2)



3)



Volume = _____

B) Find the volume of each

4) width = $\frac{3}{4}$ mm ; height = $\frac{1}{4}$ mm
length = 3 mm

Volume = _____

6) length = 4 cm ; width = $\frac{1}{2}$ cm
height = $\frac{1}{5}$ cm

Volume = _____

Gain complete access to the largest collection of worksheets in all subjects!

Members, please log in to download this worksheet.

Not a member? Please sign up to gain complete access.

www.mathworksheets4kids.com

length = 1 m ; width = $\frac{4}{3}$ m

length = 4 cm ; width = $\frac{1}{2}$ cm ; height = $\frac{5}{2}$ mm ;

Volume = _____

8) The width, length and height of a rectangular prism are $\frac{9}{4}$ cm, $3\frac{2}{3}$ cm and $1\frac{1}{11}$ cm respectively. What is its volume?
