

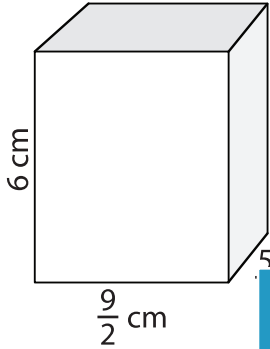
Name : _____

Volume - Rectangular Prism

Fractions: S3

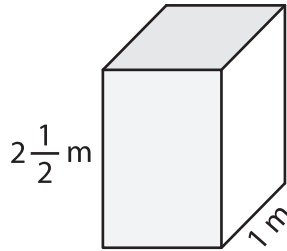
A) Find the volume of each rectangular prism.

1)

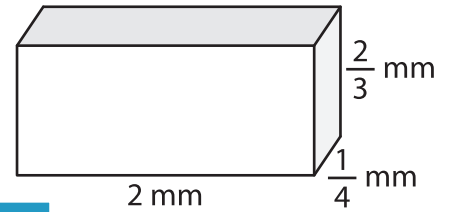


Volume = _____

2)



3)



Volume = _____

B) Find the volume of each

4) length = 8 m ; width = $\frac{5}{7}$ m

Volume = _____

6) height = $\frac{6}{7}$ mm ; width = $\frac{5}{7}$ mm ; length = 4 mm

Volume = _____

PREVIEW
Gain complete access to the largest collection of worksheets in all subjects!

Members, please log in to download this worksheet.

Not a member? Please sign up to gain complete access.

www.mathworksheets4kids.com

5) height = $1\frac{2}{5}$ cm ; length = 6 cm

7) length = $\frac{5}{7}$ m ; height = $\frac{7}{8}$ m

Volume = _____

8) Find the volume of a rectangular prism whose width, height and length are $\frac{1}{2}$ mm, $\frac{1}{9}$ mm and 4 mm respectively.