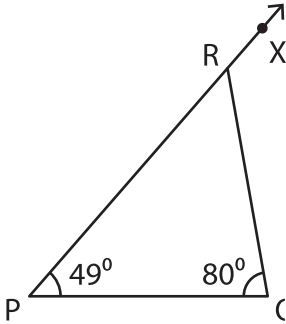


Triangle - Exterior Angles

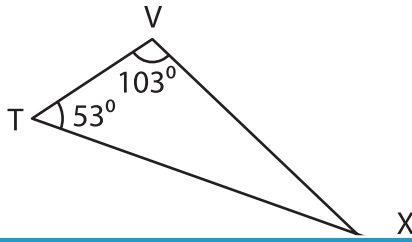
Find the measure of the indicated angle in each triangle.

1)

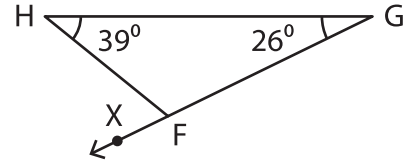


$m\angle QRX =$ _____

2)

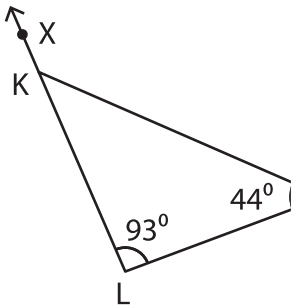


3)



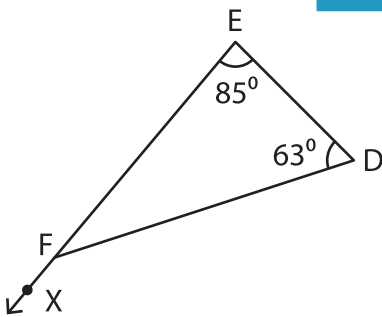
$m\angle HFX =$ _____

4)

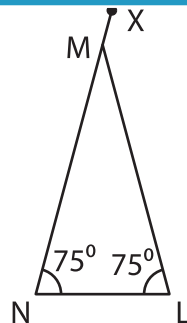


$m\angle JKX =$ _____

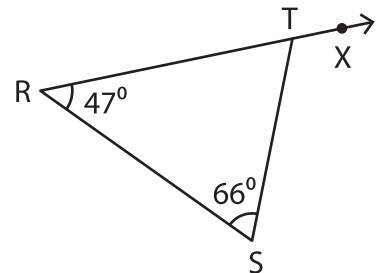
7)



$m\angle DFX =$ _____



$m\angle LMX =$ _____



$m\angle STX =$ _____

PREVIEW

Gain complete access to the largest collection of worksheets in all subjects!

Members, please log in to download this worksheet.

Not a member? Please sign up to gain complete access.

www.mathworksheets4kids.com