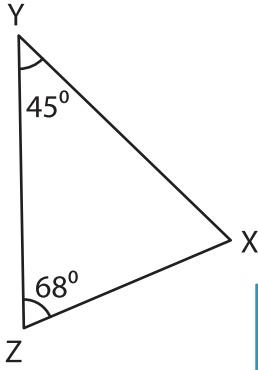


Triangle - Interior Angles

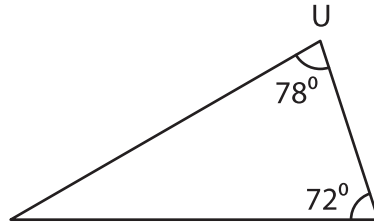
Find the measure of the indicated angle in each triangle.

1)

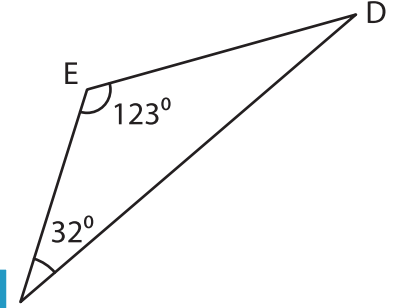


$m\angle X =$ _____

2)

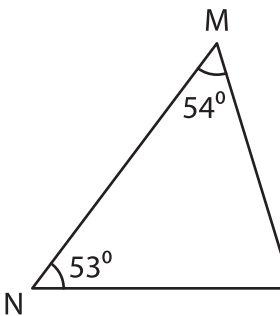


3)

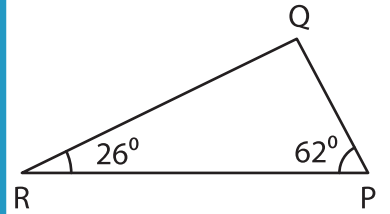


$m\angle D =$ _____

4)

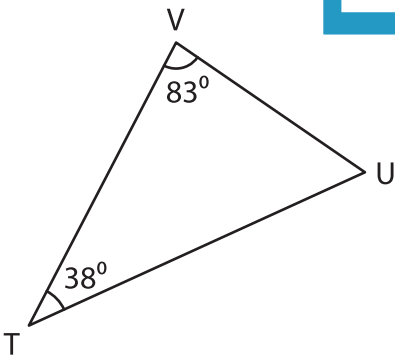


$m\angle L =$ _____

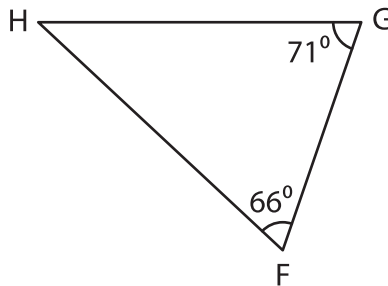


$m\angle Q =$ _____

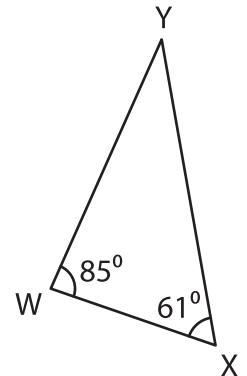
7)



$m\angle U =$ _____



$m\angle H =$ _____



$m\angle Y =$ _____

PREVIEW

Gain complete access to the largest collection of worksheets in all subjects!

Members, please log in to download this worksheet.

Not a member? Please sign up to gain complete access.

www.mathworksheets4kids.com