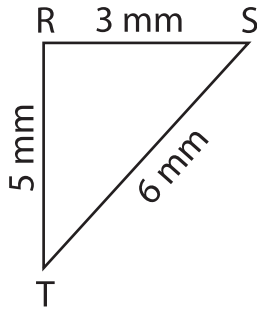


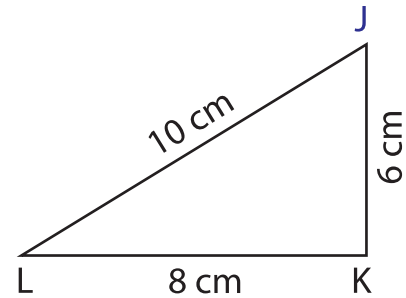
Identify the right triangles

Apply the Pythagorean theorem. Find whether each triangle has a right angle.

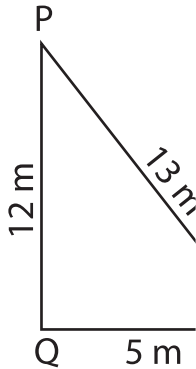
1)



2)



3)



PREVIEW

Gain complete access to the largest collection of worksheets in all subjects!

Members, please log in to download this worksheet.

Not a member? Please sign up to gain complete access.

www.mathworksheets4kids.com

5) In triangle ABC, the sides AB, BC and AC measure 15 cm, 20 cm and 26 cm respectively. Prove that ABC is a right triangle.

6) In triangle EFG, the sides EF, FG and EG measure 15 m, 17 m and 8 m respectively. Prove that EFG is a right triangle.