

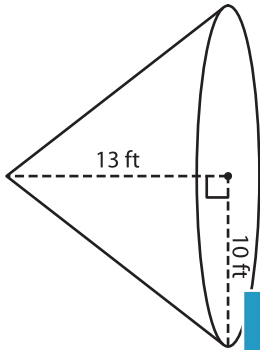
Name : _____

Volume - Cone

Integers: ES2

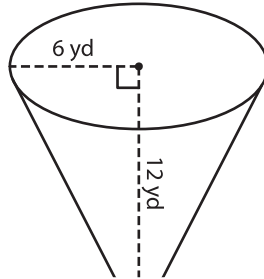
A) Find the volume of each cone. Round your answer to two decimal places.
(use $\pi = 3.14$)

1)



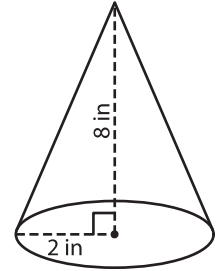
Volume = _____

2)



Volume = _____

3)



Volume = _____

B) Find the volume of each cone. Round your answer to two decimal places.

4) radius = 15 ft ; height = 10 ft

Volume = _____

6) height = 19 in ; radius = 3 in

Volume = _____

PREVIEW
Gain complete access to the largest collection of worksheets in all subjects!

Members, please log in to download this worksheet.

Not a member? Please sign up to gain complete access.

www.mathworksheets4kids.com

5) radius = 9 yd ; height = 12 yd

Volume = _____

Volume = _____

8) The hilt of a sword has a cone-shaped pommel. The radius and height of the cone are 2 inches and 3 inches respectively. How much metal is used in the pommel? (use $\pi = 3.14$)

