

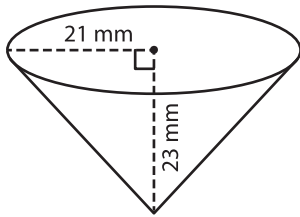
Name : _____

Volume - Cone

Integers: ES5

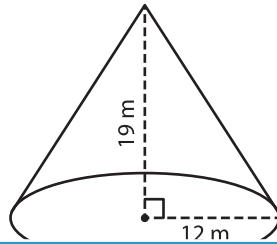
A) Find the volume of each cone. Round your answer to two decimal places.
(use $\pi = 3.14$)

1)



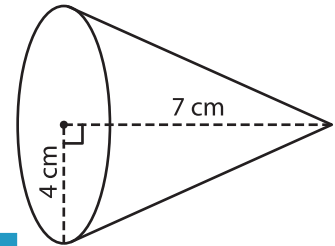
Volume = _____

2)



Volume = _____

3)



Volume = _____

B) Find the volume of each cone. Round your answer to two decimal places.

4) height = 6 m ; radius = 10 m

Volume = _____

6) radius = 28 cm ; height = 3 mm

Volume = _____

5) height = 3 mm ; radius = 15 m

Volume = _____

Volume = _____

PREVIEW

Gain complete access to the largest collection of worksheets in all subjects!

Members, please log in to download this worksheet.

Not a member? Please sign up to gain complete access.

www.mathworksheets4kids.com

8) A conical paperweight has a height and radius of 5 cm and 2 cm respectively. Find the volume of the paperweight. Round your answer to two decimal places. (use $\pi = 3.14$)
