




Name: _____







Making 10

Draw more shapes to make 10 and complete the addition equation.

1)







				




2)

3 + _____ = 10


3)



		
		

8 + _____ = 10

5)

1 + _____ = 10

2 + _____ = 10

PREVIEW

Gain complete access to the largest collection of worksheets in all subjects!

Members, please log in to download this worksheet.

Not a member? Please sign up to gain complete access.

www.mathworksheets4kids.com